



*Numbers 11 to 20*

Look at these numbers. The numbers 11 to 19 all have 1 ten and some ones and the number 20 has 2 tens. (1 ten is 10 small cubes stuck together).


Can you read these numbers from 11-20?




11



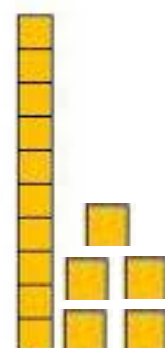
12



13




14




15

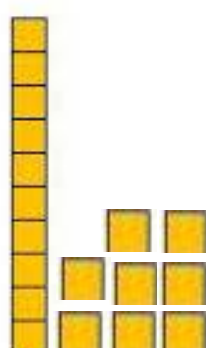
Can you read these numbers from 20-11?




16




17



18



19



20

Choose a number from 11 to 19.

Count on from that number.

Here is an example.

12...13...14...15...16...17...18...19...20

Practise with other numbers.

Then practise choosing a number from 11 to 20 and counting backwards from that number.

Here is an example.

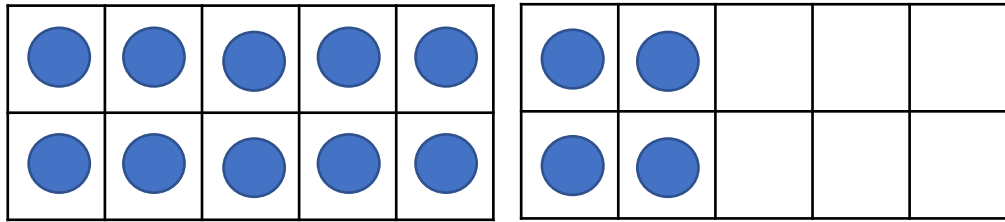
17...16...15...14...13...12...11...10...9...8...7...6...5...4...3...2...1...0

Practise with other numbers.

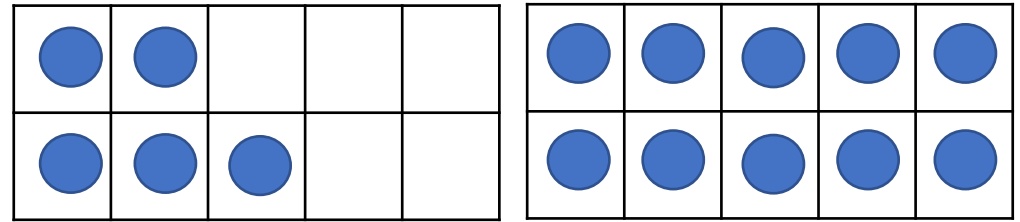
Say a number out loud from 11-20 and encourage your child to write it down in numbers not words.

Practise with other numbers.

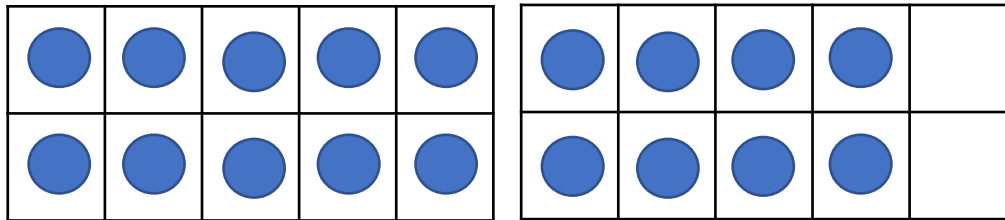
Have a look at these tens frames (a tens frame is a frame with 10 boxes). Can you work out what these numbers are? If the tens frame is full you should be able to count on from 10.



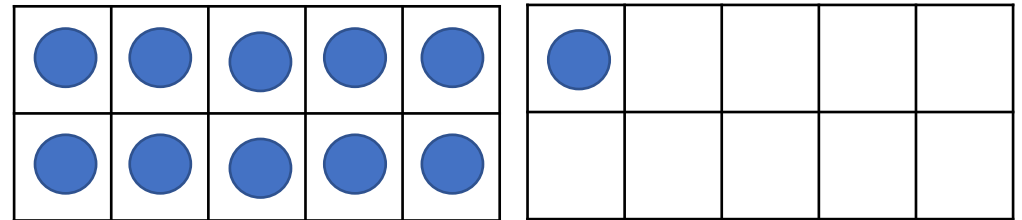
Number:



Number:




Number:



Number:

Have a look at these pictures. Can you work out what the numbers are?




Number:





Number:




Number:



Number:



Number:



Number:

Look at these number trains. Can you tell an adult what the missing numbers are? Make sure you check if the numbers are going forwards or backwards!

|    |    |  |  |  |
|----|----|--|--|--|
| 12 | 13 |  |  |  |
|----|----|--|--|--|

|  |  |    |    |    |  |  |
|--|--|----|----|----|--|--|
|  |  | 15 | 16 | 17 |  |  |
|--|--|----|----|----|--|--|

|  |    |  |    |  |    |
|--|----|--|----|--|----|
|  | 12 |  | 14 |  | 16 |
|--|----|--|----|--|----|

|    |    |  |  |  |
|----|----|--|--|--|
| 16 | 15 |  |  |  |
|----|----|--|--|--|

|    |    |  |  |  |  |  |
|----|----|--|--|--|--|--|
| 20 | 19 |  |  |  |  |  |
|----|----|--|--|--|--|--|