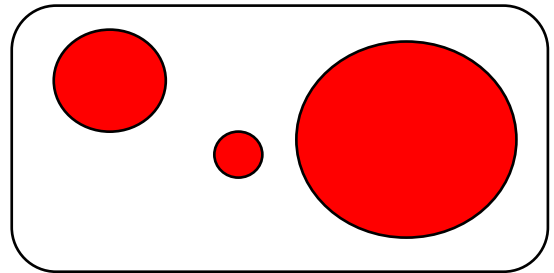
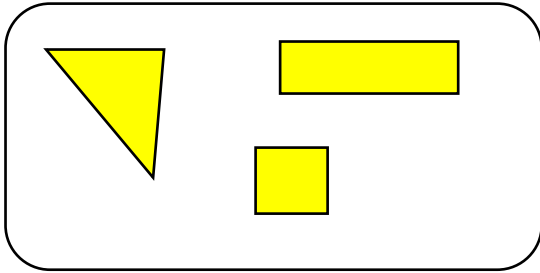



Can I sort 2D shapes?

How have the shapes been sorted?



Draw a shape that is NOT a circle or triangle. Label it too. Remember if your shape has corners, you need to make sure your shape shows this.



Sort the shapes. The first one has been done for you.

Eva has sorted some shapes. Has she sorted them correctly?



Tommy says all shapes with 4 sides are squares. Is he right? Explain it.