

Can I compare amounts?

Annie and Tommy have these sweets. Answer the questions.



Annie



Who has the most sweets?

_____.

_____ is more than _____.

Who has the least sweets?

_____.

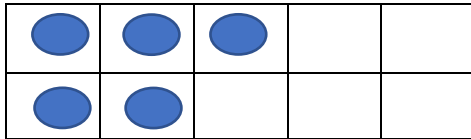
_____ is less than _____.





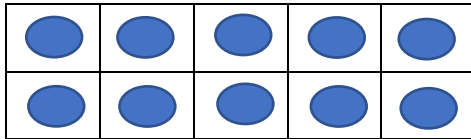

Tommy




Use the words 'greater than', 'less than' and 'equal to' to complete the sentences.



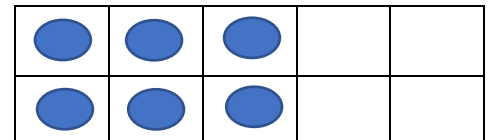
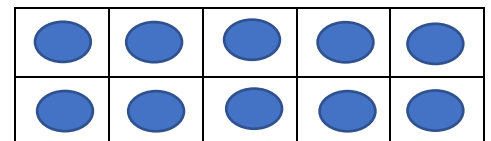
is _____



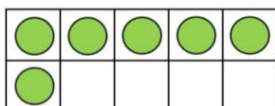

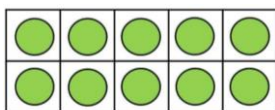

is _____



is _____



Circle the picture which is the odd one out. Explain how you know.



Which is greater? A or B? Explain how you know.

