

Can I compare amounts?

Annie and Tommy have these sweets. Answer the questions.



Annie



Who has the most sweets?

\_\_\_\_\_.

\_\_\_\_\_ is more than \_\_\_\_\_.

Who has the least sweets?

\_\_\_\_\_.

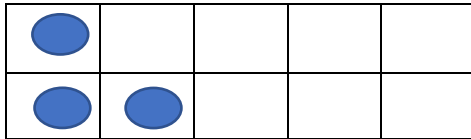
\_\_\_\_\_ is less than \_\_\_\_\_.





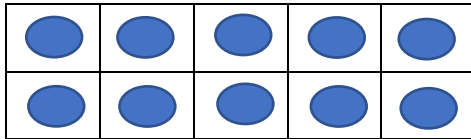
Tommy



Use the words 'greater than', 'less than' and 'equal to' to complete the sentences.



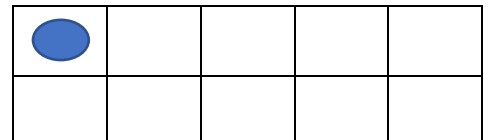
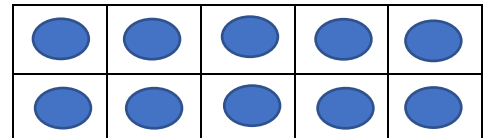
is \_\_\_\_\_



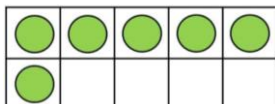
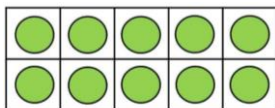

is \_\_\_\_\_



is \_\_\_\_\_



Circle the picture which is the odd one out. Explain how you know.



\_\_\_\_\_