


Can I find one more and one less than a number 11 to 20?

DRAWINGS


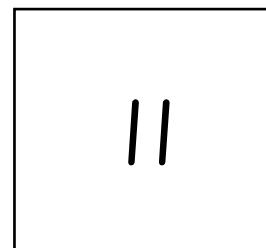




One less



Number




One more



WORD PROBLEMS

Eva has 11 strawberries. Her sister gives her 1 more. How many strawberries does Eva have now?



There are 14 cars in a car park. 1 car leaves. How many cars are in the car park now?

