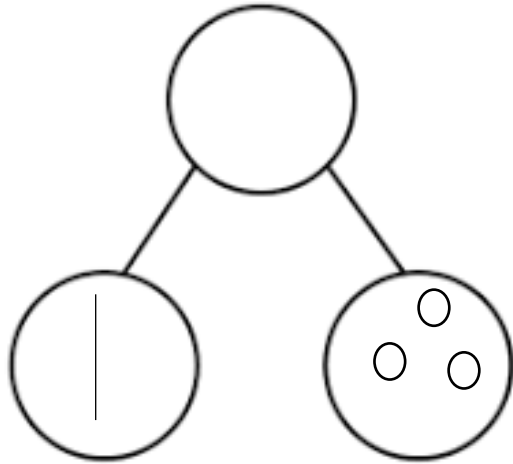


Can I draw tens and ones in part part whole models to represent numbers 11 to 20?

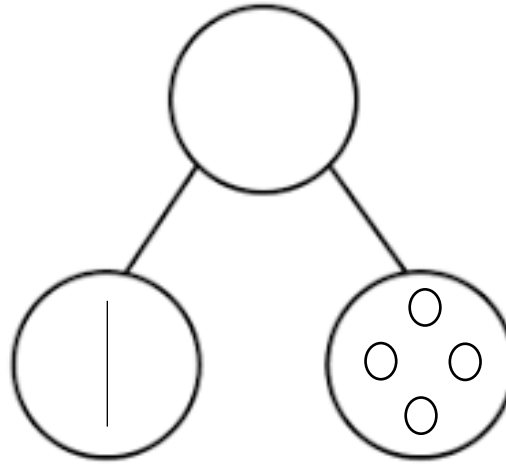
Fill in the missing gaps and the wholes.



One part is _____.

The other part is _____.

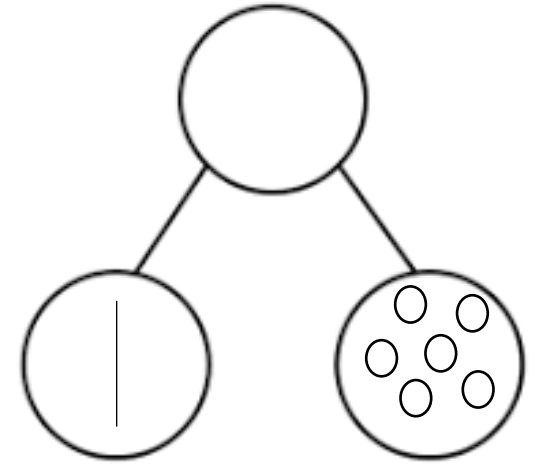
The whole is _____.



One part is _____.

The other part is _____.

The whole is _____.



One part is _____.

The other part is _____.

The whole is _____.

Draw sticks and bricks in these parts to show the whole.

