


Can I represent numbers with tens and ones?

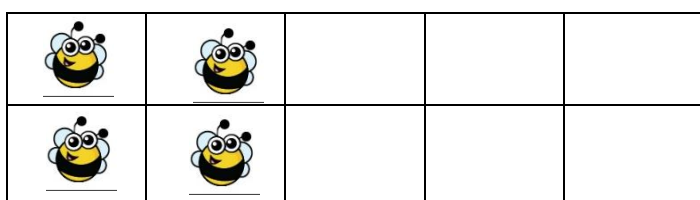
Draw sticks and bricks to show these numbers. Remember to look at the numbers to help you.

16	15	11
19	20	18

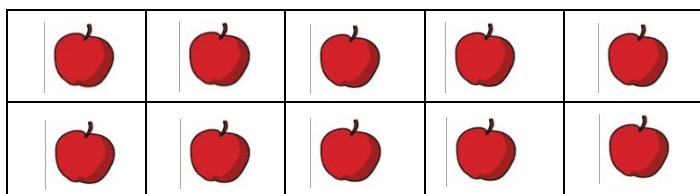
Look at these tens frames. Fill in the missing gaps in the sentences.




There is _____ ten and _____ ones.



There are _____ bees altogether.




There is _____ ten and _____ ones.



There are _____ apples altogether.

Draw counters to show 1 ten and 7 ones.



1 ten and 7 ones is equal to

Draw lines to match the sentences to the pictures.

1 ten and 2 ones

1 ten and 0 ones

2 tens and 0 ones

