
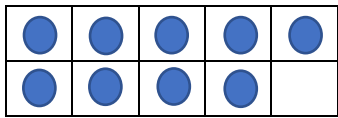


Can I add by counting on?

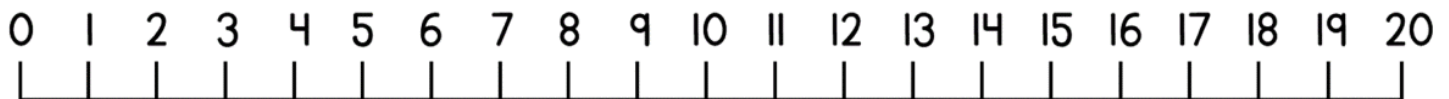
There are 9 people in a bus. Another 5 get on. How many people are there on the bus now?



$$\square + \square = \square$$

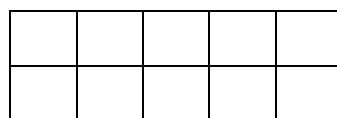
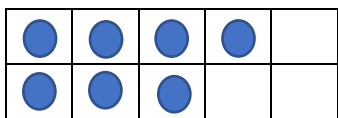


7 pennies are in a piggy bank. Another 8 get put in.
How many pennies are there altogether?



$$\square + \square = \square$$

Eva has got 6 marbles. Her mums gives her 7 more. How many marbles does she have now?



$$\square + \square = \square$$



There are 11 birds on a tree. Another 9 birds land on the tree too. How many birds are on the tree now?

$$\square + \square = \square$$

