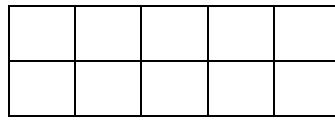
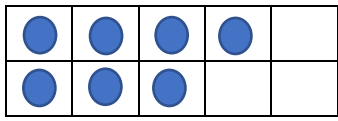


Can I add by counting on?

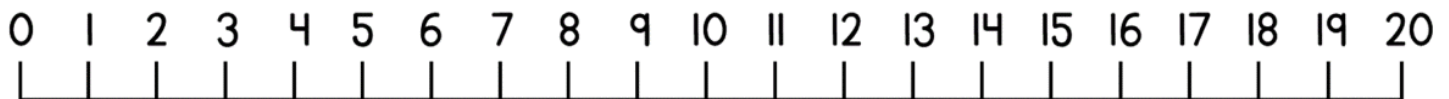
There are 5 people in a bus. Another 7 get on. How many people are there on the bus now?



$$\square + \square = \square$$

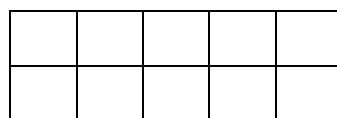
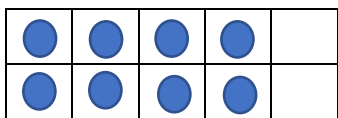


6 pennies are in a piggy bank. Another 10 get put in.  
How many pennies are there altogether?



$$\square + \square = \square$$

Eva has got 8 marbles. Her mums gives her 4 more. How many marbles does she have now?



$$\square + \square = \square$$



There are 9 birds on a tree. Another 2 birds land on the tree too. How many birds are on the tree now?

$$\square + \square = \square$$

