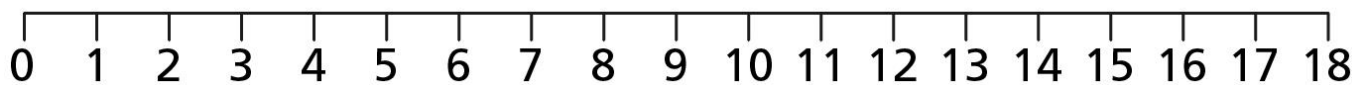



Can I order numbers?

How many tiles are there? Write the amount next to each one then order them starting with the smallest.



Smallest

Order the numbers from greatest to smallest.

17 3 7 13

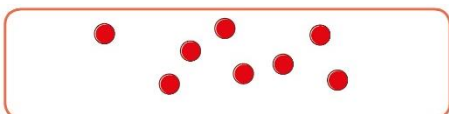
0 20 10 2


Order the numbers from smallest to greatest.

1 15 11 5

19 4 9 14

The counters are from smallest to greatest.
How many counters can you draw in the middle box?





Mr Monaghan says,



My number is greater than 8 but less than 15

What could his number be?

Write down all the answers there could be.