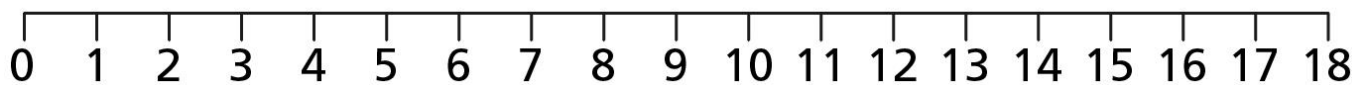



Can I order numbers?

How many tiles are there? Write the amount next to each one then order them starting with the smallest.



Smallest




Order the numbers from greatest to smallest.

20    7    15    2

13    9    17    3

Order the numbers from smallest to greatest.

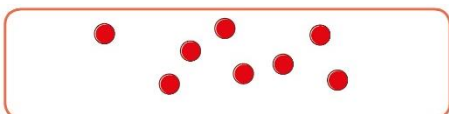
1    16    5    11


   

19    14    12    18

The counters are from smallest to greatest.  
How many counters can you draw in the middle box?





Mr Monaghan says,



My number is greater than 8 but less than 15

What could his number be?

Write down 2 answers.

\_\_\_\_\_ and \_\_\_\_\_