

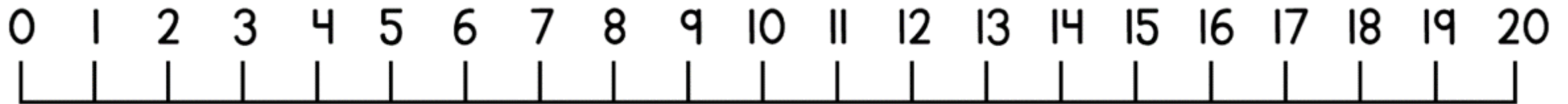
Ordering numbers

Today you are going
to be doing the same
as yesterday but just
using numbers
instead of pictures!

What does greatest
mean?

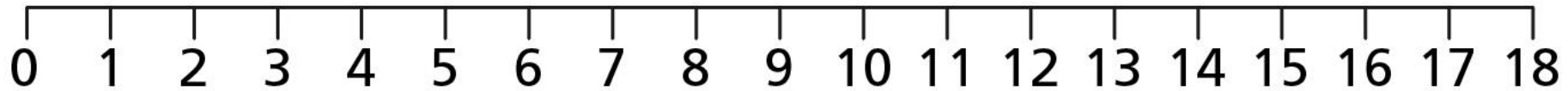

What does smallest
mean?

Remember to use this
number line to help
you find the numbers
in order.



Talk about these
questions with an
adult.

How many tiles are there? Write the number next to each one and then order them.



Start with the greatest number.

Order the numbers from smallest to greatest.

19

10

14

9

20

15

Order the numbers from greatest to smallest.

13

8

12


17

4


18

The counters are in order from smallest to greatest. How many counters can you draw in the missing box?

Smallest



Greatest



Three children were playing basketball. The scoreboard shows how many hoops they scored each. The winner is the person who scored the most hoops.

Eva: 9
Jack: 16
Tommy: 13

Order the children...

1st: _____

2nd: _____

3rd: _____

Who was the winner? _____

Who came last? _____

Now have a go at
your sheet!