


How to draw tens
and ones - recap

Look at this number.
What is it?

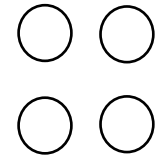

14

Last week some of us were drawing this...

If we start splitting every ten stick we draw into little cubes we will be forever, so remember, a stick (line) for tens and circles for bricks/ones.



We need to be able to see what a ten stick looks like but we don't need to draw it exactly the same.



Have a practise with this
number...

16

Your adult will check it and then
move on to your activity!

Look at these numbers. Draw the right amount of sticks and bricks (tens and ones).

11 →

15 →

13 →

18 →

17 →

19 →

16 →

10 →

12 →

20 →

14 →

Look at these sticks and bricks (tens and ones). Now write the number for each one.

