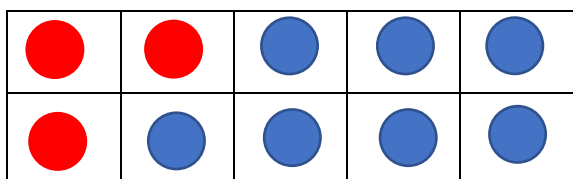


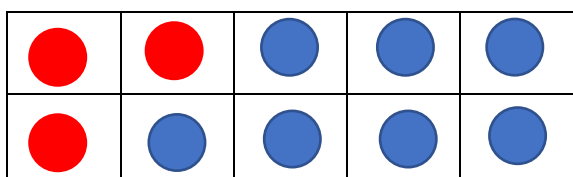
Can I find and make number bonds to 10 and 20?

Look at the tens frames and fill in the missing numbers. Remember to find the matching number sentence for each one too.

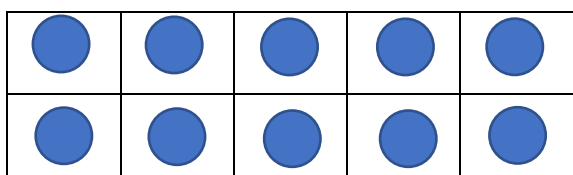


$$\underline{\quad\quad} + \underline{\quad\quad} = 10$$


$$\underline{\quad\quad} + \underline{\quad\quad} = 10$$



$$\underline{\quad\quad} + \underline{\quad\quad} = 20$$




$$\underline{\quad\quad} + \underline{\quad\quad} = 20$$

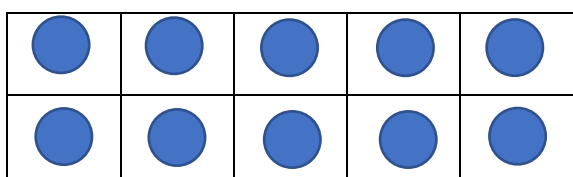


$$\underline{\quad\quad} + \underline{\quad\quad} = 10$$

$$\underline{\quad\quad} + \underline{\quad\quad} = 10$$



$$\underline{\quad\quad} + \underline{\quad\quad} = 20$$



$$\underline{\quad\quad} + \underline{\quad\quad} = 20$$

Use these tens frames to show and complete the number bonds.  
Remember to find the matching number sentence for each one too.


$$2 + 8 = \underline{\hspace{2cm}}$$

$$\underline{\hspace{2cm}} + \underline{\hspace{2cm}} = \underline{\hspace{2cm}}$$


$$12 + 8 = \underline{\hspace{2cm}}$$

$$\underline{\hspace{2cm}} + \underline{\hspace{2cm}} = \underline{\hspace{2cm}}$$


Find the missing numbers in these number bonds. Use the tens frames to help you.


$$9 + \underline{\hspace{2cm}} = \underline{\hspace{2cm}}$$

$$\underline{\hspace{2cm}} + \underline{\hspace{2cm}} = \underline{\hspace{2cm}}$$


$$1 + \underline{\hspace{2cm}} = \underline{\hspace{2cm}}$$

$$\underline{\hspace{2cm}} + \underline{\hspace{2cm}} = \underline{\hspace{2cm}}$$
