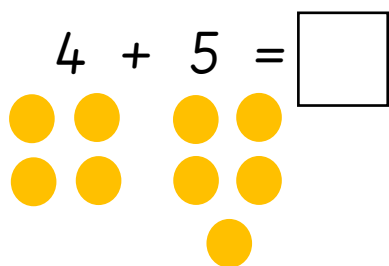


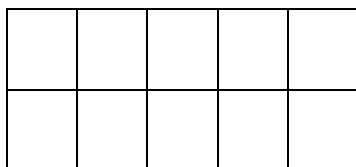
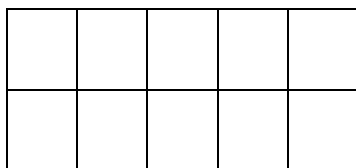
Can I add ones using number bonds?

Work these number sentences out using a tens frame.



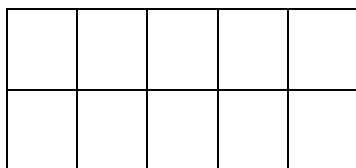
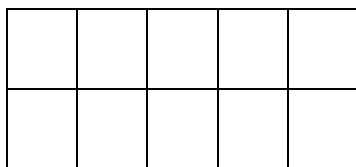
$5 + 4 = \square$

$14 + 5 = \square$



$5 + 14 = \square$

$15 + 4 = \square$



$4 + 15 = \square$

Use number lines to work out these number sentences. Circle all the ones which make 19.

$6 + 13$

$3 + 16$

$13 + 6$

$16 + 3$