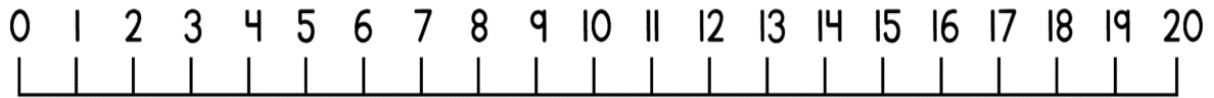
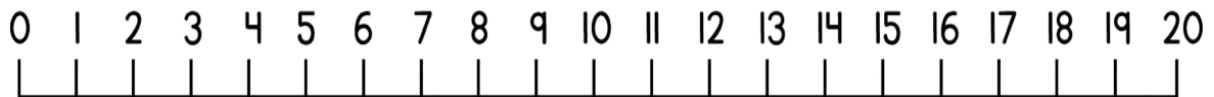


Can I subtract on a number line crossing 10?

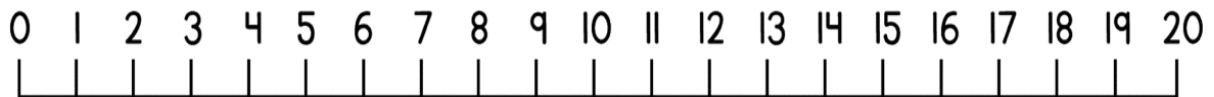
$$15 - 8 = \underline{\quad}$$



$$13 - 6 = \underline{\quad}$$

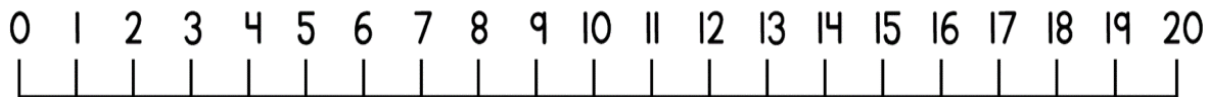


$$16 - 9 = \underline{\quad}$$



There are 13 people on a bus. 9 get off. How many people are left on the bus?

$$\underline{\quad} - \underline{\quad} = \underline{\quad}$$



There are 14 coins in a pot. 8 coins get taken out. How many coins are left?

$$\underline{\quad} - \underline{\quad} = \underline{\quad}$$

