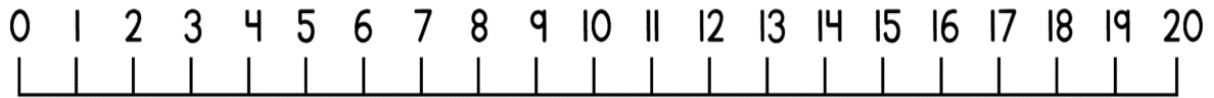
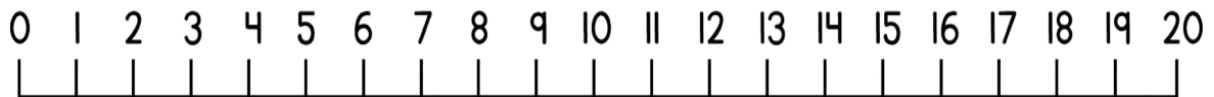


Can I subtract on a number line crossing 10?

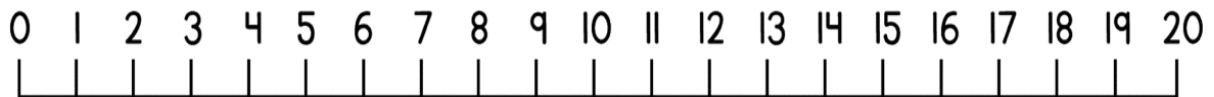
$$12 - 3 = \underline{\quad}$$



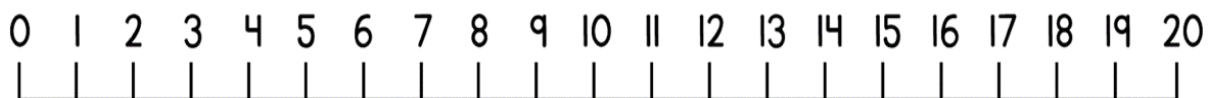
$$13 - 5 = \underline{\quad}$$



$$11 - 2 = \underline{\quad}$$



$$14 - 5 = \underline{\quad}$$



There are 11 people on a bus. 2 get off. How many people are left on the bus?

$$\underline{\quad} - \underline{\quad} = \underline{\quad}$$

