

Can I subtract crossing the number 10 using pictures and objects?

Use objects to work these out...

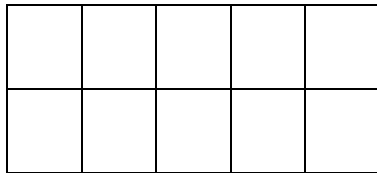

$12 - 3 = \underline{\quad}$

$11 - 5 = \underline{\quad}$

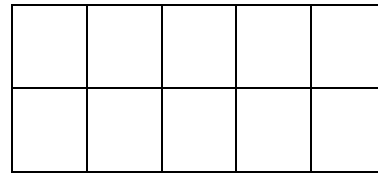

$13 - 5 = \underline{\quad}$

Use the tens frames to work out the answers to these questions...

$11 - 7 = \underline{\quad}$



$12 - 5 = \underline{\quad}$



Use the picture to help you work out the answer.

There were 12 marbles altogether. 4 marbles rolled away. How many were left?



$12 - 4 = \underline{\quad}$

There were marbles left.

There were 14 cakes on a tray. My friend ate 5 of them. How many were left?



$14 - 5 = \underline{\quad}$

There were cakes left.