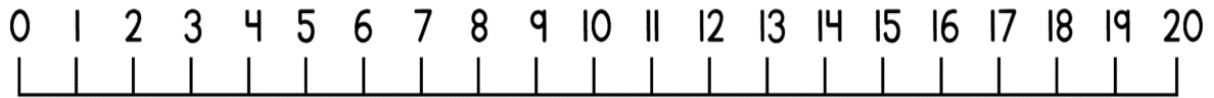
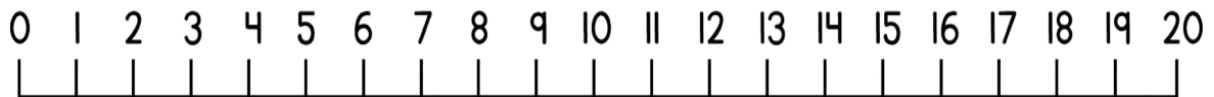


Can I subtract on a number line not crossing 10?

$$17 - 6 = \underline{\quad}$$

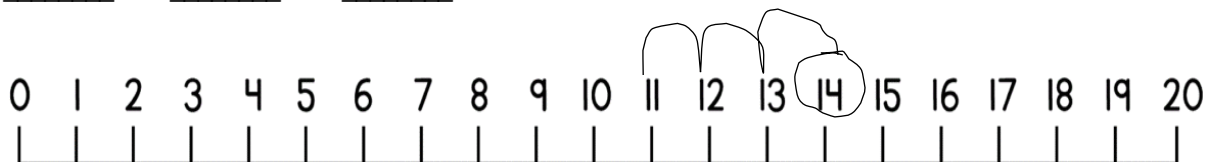


$$18 - 3 = \underline{\quad}$$



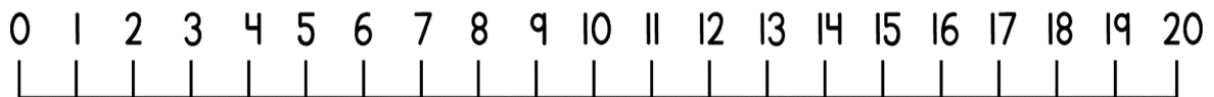
Sam has worked out this subtraction. Work out what the number sentence is.

$$\underline{\quad} - \underline{\quad} = \underline{\quad}$$



There are 16 cookies in a jar. Mo eats 6 of them. How many are left in the jar?

$$\underline{\quad} - \underline{\quad} = \underline{\quad}$$



There are 15 toys in a toybox. 1 of them are thrown out. How many are left in the toybox?

$$\underline{\quad} - \underline{\quad} = \underline{\quad}$$

