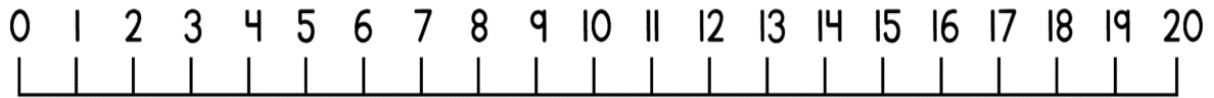
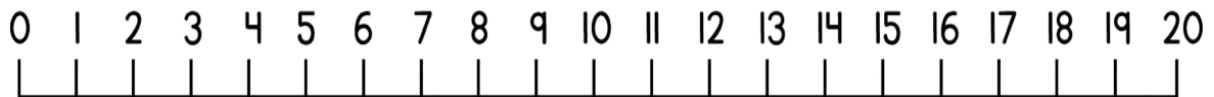


Can I subtract on a number line not crossing 10?

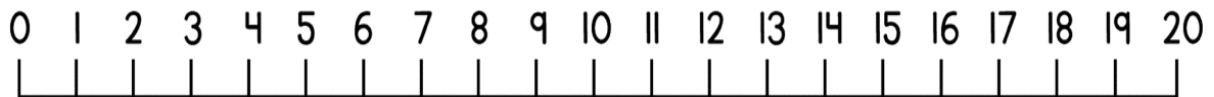
$$12 - 1 = \underline{\quad}$$



$$13 - 3 = \underline{\quad}$$

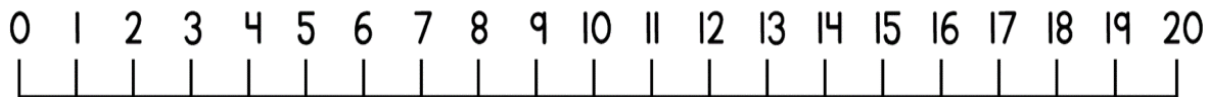


$$14 - 2 = \underline{\quad}$$



There are 15 cookies in a jar. Mo eats 3 of them. How many are left in the jar?

$$\underline{\quad} - \underline{\quad} = \underline{\quad}$$



There are 14 toys in a toybox. 4 of them are thrown out. How many are left in the toybox?

$$\underline{\quad} - \underline{\quad} = \underline{\quad}$$

