

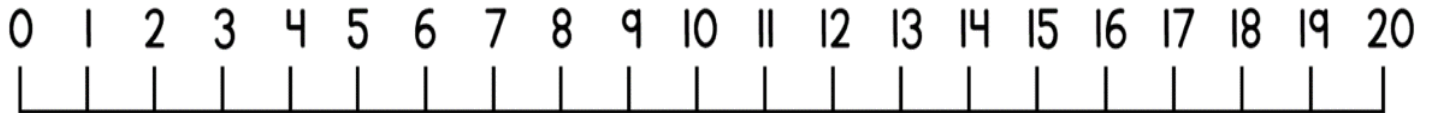
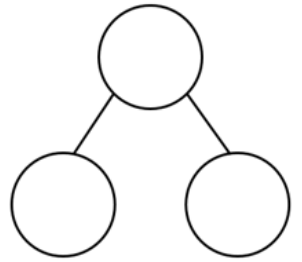
Can I work out missing numbers in addition number sentences?

$$\underline{\quad} + 4 = 16$$

$$16 = \underline{\quad} + 4$$

$$\underline{\quad} + \underline{\quad} = \underline{\quad}$$

$$16 = 4 + \underline{\quad}$$

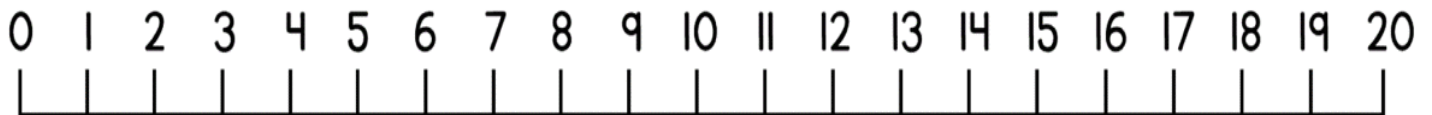
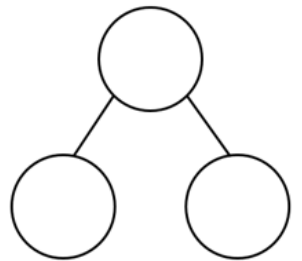


$$6 + \underline{\quad} = 18$$

$$\underline{\quad} = \underline{\quad} + \underline{\quad}$$

$$\underline{\quad} + \underline{\quad} = \underline{\quad}$$

$$\underline{\quad} = \underline{\quad} + \underline{\quad}$$



$$\underline{\quad} + 9 = 17$$

$$\underline{\quad} = \underline{\quad} + \underline{\quad}$$

$$\underline{\quad} + \underline{\quad} = \underline{\quad}$$

$$\underline{\quad} = \underline{\quad} + \underline{\quad}$$

