
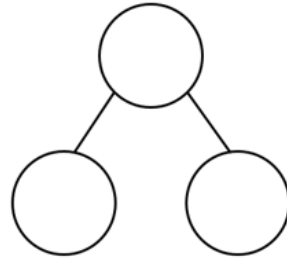


Can I work out missing numbers in addition number sentences?

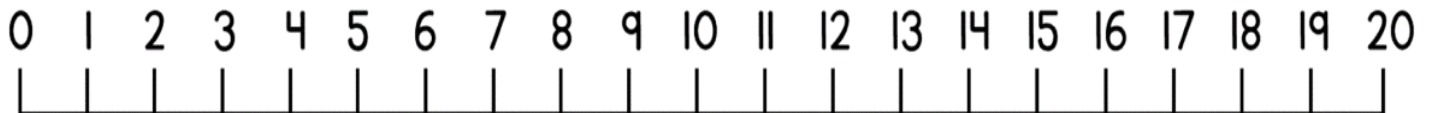
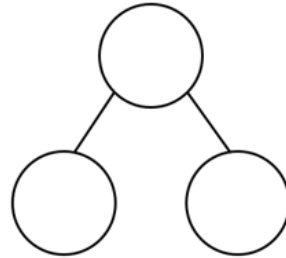
$$\underline{\quad} + 4 = 13$$

$$\underline{\quad} + \underline{\quad} = \underline{\quad}$$



$$7 + \underline{\quad} = 17$$

$$\underline{\quad} + \underline{\quad} = \underline{\quad}$$



$$\underline{\quad} + 8 = 20$$

$$\underline{\quad} + \underline{\quad} = \underline{\quad}$$

